

Tim has 3 pieces of candy and Jen has 2 pieces of candy. How many pieces do they have altogether?



I had 16 pieces of candy. My little brother ate 5 pieces. How much candy do I have left?

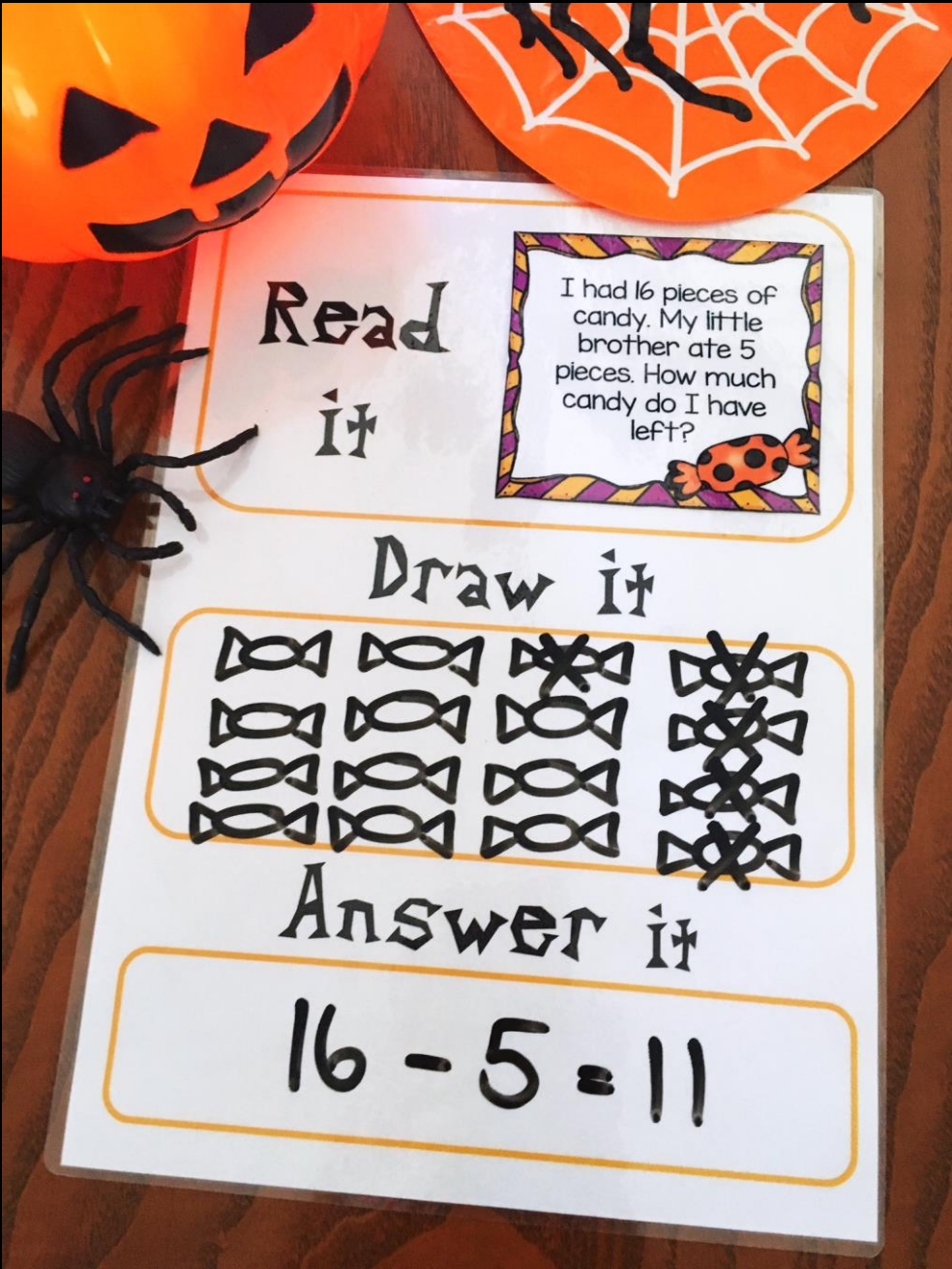


Sam went trick-or-treating with 10 kids. 7 of them went home early. How many kids stayed?



# 36 Addition and Subtraction Word Problems






Read

it

I had 16 pieces of  
candy. My little  
brother ate 5  
pieces. How much  
candy do I have  
left?




Draw it



Answer it

$$16 - 5 = 11$$

Includes a word  
problem mat



Read  
it

Draw it

Answer it

Includes a word  
problem mat

