

Name: _____

Count It On

Roll 1 or 2 die, write the number and count it on.

Name: _____

Backward Strips

Count backwards to complete the number sequence.

18	17		15		12	
	9	8		5	4	
15			12	10	9	
		6	5	4		1
17		15			11	10
20	19			15		13

Name: _____

Place Value

Count the blocks and write how many tens/ones there are.

tens ones	tens ones	tens ones
tens ones	tens ones	tens ones
tens ones	tens ones	tens ones

Name: _____

What Comes Next?

Write the number that comes next.

14	27	89
19	40	36
16	58	44
20	62	19
13	29	80
24	33	52
28	59	86

Name: _____

Counting by 2's

Name: _____

Base Ten Blocks

Match the blocks to the numbers.

60	20	70	40	90
30	80	100	10	50

Name: _____

100 Chart

Fill in the missing numbers.

1	2	3		5	6		8		10
11			14		16	17		19	20
	22	23		25	26	27	28	29	
31		33	34	35			38		40
41	42		45	46	47		49		
51		53	54		56		58	59	60
	62	63			66	67		69	

Name: _____

Ten Frames

Write + or - to compare the ten frames.

Name: _____

Teen Numbers

Color the ten frames to match the numbers.

Name: _____

Sorting Numbers

Less than 20 More than 20

Name: _____

Greater Number

Color the number that is largest.

12	10	15	5	6	10
5	18	10	11	8	14
3	9	14	15	16	6
13	14	18	8	13	12
17	7	6	19	18	20

Name: _____

Numbers to 30

Fill in the missing numbers to 30.

1	2			5
	7	8		
11			14	
	17			20

Name: _____

Find the Pattern

Continue the number patterns.

2	4	6	8				
10	9	8	7				
3	6	9	12				
7	9	11	13				
5	10	15	20				
20	18	16	14				

Name: _____

Fill in the Numbers

1.	36	37		39		
2.		41	42			45
3.	83			86		
4.		59		61	62	
5.	21		23			26

Name: _____

Number Match

3 tens		2 tens	
4 ones		8 ones	
6 tens		7 tens	
2 ones		0 ones	
9 tens		4 tens	
0 ones		9 ones	
7 tens		8 tens	

Name: _____

Odd or Even

Paste the numbers in the matching gumball machine.

Name: _____

Matching Blocks

Match the numbers to the blocks.

59 33 44 52 61 72 45 68

Name: _____

Number Parts

Fill in the missing number parts.

Name: _____

Find the Numbers

Work out the answers and fill in the numbers.

	10 More	10 Less	1 More	1 Less
38				
62				
50				
18				
44				
79				

Name: _____


Counting by 5's

Color the stars in order to count by 5's.

Name: _____

Counting by 10's

Paste the numbers in order to count by 10's.



Name: _____

Missing Numbers


Fill in the missing numbers.

12	13			24		26	
	8		10			15	16
14		16		4			7
	25	26		18	19		
		17	18			27	28

Name: _____

Base Ten Counting

Match the numbers to the blocks.



Name: _____

Number Race

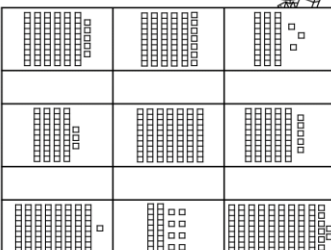
Roll 1 or 2 dice, write + or = to compare the numbers. The person who rolls the highest number wins.

Person 1										Person 2

90 20 100 60 30

Name: _____

Tens & Ones



Name: _____

Comparing Numbers

Paste the numbers in the correct column.

True	False
------	-------

Name: _____

Gumball Numbers

3 tens = blue
5 ones = red
1 ten = yellow
3 ones = green
8 tens = purple
0 ones = pink

34	50	75	38	81	55
25	36	87	40		
53	70	93	23		
20	82	37	63		
32	65	86	90	85	
95	73	89	31	84	
88	45	39	43	60	

Name: _____

Before and After

Write the number that comes before and after.

15		7	
9		16	
17		11	
4		19	
5		6	
12		14	

Name: _____

120 Chart

Fill in the missing numbers.

1	3	4	5	7	8	10	
12	13		16	17		19	20
21	22	24	25	26		28	29
	33			37	38		40
41	42		45	46	47	49	
	52	53	54	56	58	60	
61		64	65	67	68		
72	73		76	77		79	80

Name: _____

Heart Order

Order the numbers from smallest to largest.

38	32	35	25	30	22	29	26	21	24
23	42	34	20	18	13	30	9	27	56
38	55	63	32	49	78	45	66	12	46
30	70	80	50	40	12	32	22	52	42
94	35	99	89	97	56	15	65	85	60

Name: _____

Missing Numbers

Fill in the missing numbers.

35	36			72		74	
	18		20			49	50
22		24		36			39
	58	59		20	21		

Name: _____

Before and After

Write the number that comes before and after.

25		83	
76		45	
15		30	
44		24	
29		81	
65		49	
28		71	

Name: _____

Numbers 100-120

Write the number that comes after or before.

After	Before	After
100	106	103
106	118	114
104	101	108
116	109	115

Name: _____

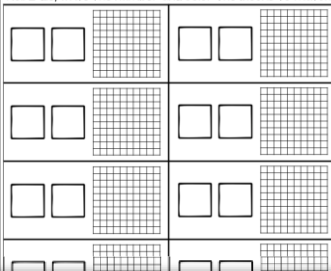
Fill in the Numbers

1.	12	13		15	
2.		10	11		14
3.	6			9	
4.		15		17	18
5.	5		7		10

Name: _____

Representing Numbers

Roll 2 dice, write the number and color the blocks to match.



Name: _____

Expand It

Write how many tens and ones each number has.

28 =		
65 =		
82 =		
39 =		
40 =		
71 =		

Name: _____

10 Less, 10 More

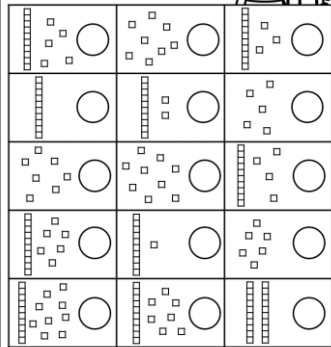
Write ten less and ten more than each number.

{58}	{20}	{32}
{65}	{40}	{54}
{44}	{19}	{51}
{63}	{77}	{68}
{39}	{90}	{38}
{79}	{81}	{35}
{42}	{76}	{89}

Name: _____

Counting Blocks to 20

Count the base ten blocks.



Name: _____

Heart Order

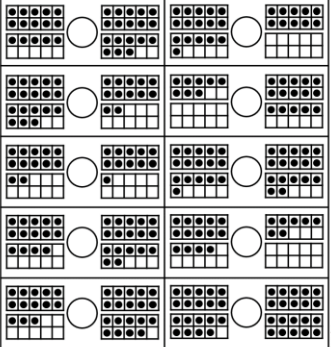
Order the numbers from smallest to largest.

13	8	12	16	14	19	11	10	15	7
19	23	21	22	20	16	18	4	12	13
10	6	22	13	17	25	5	15	20	10
18	6	13	3	14	11	20	16	12	9
26	24	22	20	28	28	4	5	17	19
10	27	20	4	30	19	12	30	26	3

Name: _____

Ten Frames

Write < or > to compare the ten frames.




Name: _____

Backward Strips

Count backwards to complete the number sequence.

49	48	46	44	43	
32	30		27	25	
	75	74	72	71	
28		25		22	21
60	59		56	55	
	84	83		80	



Name: _____

Representing Numbers

Color the blocks to match the numbers.


28		40	
63		72	
35		21	
86		54	

Name: _____

Sorting Numbers

Less than 50 More than 50

89 | 36 | 70 | 51 | 32 | 55 | 18 | 70



Name: _____

Roll and Draw


Roll 2 die, write the number, draw blocks to match and expand it.

Roll	Draw	Write
4 5		4 tens 5 ones
		___ tens ___ ones
		___ tens ___ ones
		___ tens ___ ones
		___ tens ___ ones
		___ tens ___ ones

Name: _____

Write a Number That Has...

4 tens	8 ones	6 tens	5 ones
9 ones	5 tens	0 ones	4 ones
1 ten	3 ones	9 tens	7 tens
2 ones	6 ones	2 tens	7 ones



Name: _____

Ice-Cream Maze

Color the numbers from 101-120 in order.




101 102 103 109
110 108 104 107
116 111 114 105 101
109 108 107 106 109
110 102 118 119 103
111 116 117 120 112

Name: _____

Draw the Numbers

Draw the numbers using base ten blocks.

48	39
82	20
61	73
26	55



Name: _____

Greater Number

Color the number that is largest.

32	42	63	14	70	90
26	23	50	39	67	76
45	38	41	51	32	30
20	30	32	23	87	57
49	47	36	57	33	55
61	51	82	81	40	80



Name: _____

Number Order

Write the numbers that come before and after.

32

48

20

75

61

36


89

Name: _____

Count & Write

Count the blocks and write how many there are.

	<input type="text"/>		<input type="text"/>
	<input type="text"/>		<input type="text"/>
	<input type="text"/>		<input type="text"/>
	<input type="text"/>		<input type="text"/>




Name: _____

Mystery Numbers

Fill in the missing numbers.

25	16	26	27	43	31	36
	58		65		39	
	50		72		47	



Name: _____

Number Order

Write the numbers that come before and after.

18

22

13

25

10

19

Name: _____

Comparing Numbers

Write < > or = to compare the numbers.

42 ○ 64 60 ○ 50

33 ○ 21 81 ○ 71

18 ○ 16 32 ○ 52


89 ○ 93 74 ○ 79

72 ○ 78 68 ○ 60

64 ○ 60 33 ○ 37

36 ○ 48 99 ○ 95

53 ○ 32 89 ○ 90



Name: _____

Compare It

14	<input type="text"/>	10	16	<input type="text"/>	18
16	<input type="text"/>	13	15	<input type="text"/>	15
12	<input type="text"/>	17	18	<input type="text"/>	13
13	<input type="text"/>	12	10	<input type="text"/>	19
11	<input type="text"/>	11	12	<input type="text"/>	15